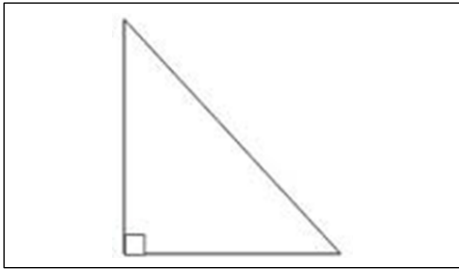


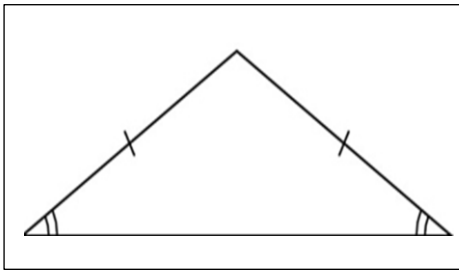
Right angle

No equal sides
And
No equal angles



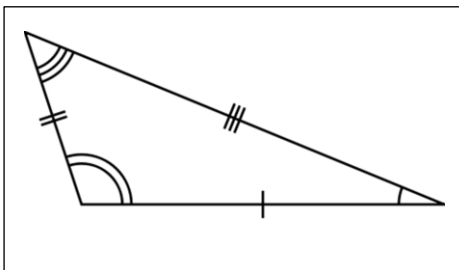
Scalene

3 equal sides
And
3 equal angles



Equilateral

2 equal sides
And
2 equal angles



Isosceles

Has 1 Right angle

Draw some triangles in the boxes below and then label them using equilateral, isosceles, right angle or scalene

