


Name \_\_\_\_\_

Date \_\_\_\_\_




## 3-DIGIT ADDITION PROBLEMS SHEET 2


### WORKING OUT

- 1)  There are 384 cats in an animal rescue shelter. 176 more cats are brought into the shelter.  
How many cats in the shelter now?


*There are \_\_\_\_\_ cats in the shelter now.*

- 2)  Frazer watches two films back-to-back. The first film lasts 127 minutes. The second film lasts 96 minutes.  
How long does he spend watching the films?


*He spends \_\_\_\_\_ minutes watching the films.*

- 3)  Sally and Quadra have a spider catching contest. Sally catches 476 spiders. Quadra catches 349 spiders.  
How many spiders have they caught altogether?


*They catch \_\_\_\_\_ spiders altogether.*

- 4)  Captain is putting up a fence. He puts up 752 feet of fence in the first day. He puts up 528 feet in the second day. How much fence has he put up so far?

*He has put up \_\_\_\_\_ feet of fence so far.*

- 5)  A flock of 846 bats take to the sky. Another 485 bats join the flock. How many bats in all?

*There are \_\_\_\_\_ bats in all.*

- 6)  Sally is climbing a mountain. She climbs 786 feet in one ascent and another 492 feet in a second ascent.  
How far has she climbed?

*She has climbed a total of \_\_\_\_\_ feet.*