

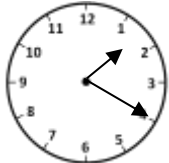






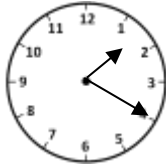
MENTAL MATHS SHEET 3:B7

1)	$100 - 7$	
2)	Write one thousand three hundred and eight	
3)	What is the value of the digit 9 in the number 3291?	
4)	Double a number is 26. What is the number?	
5)	What fraction is shaded? 	
6)	How many cm in $3 \frac{1}{2}$ metres?	
7)	$3 \frac{1}{2} + 4 \frac{1}{2}$	
8)	Double 7 = <u> </u> + 10	
9)	Add together 1 TWENTY, 3 TENS and 3 FIVES.	
10)	Measure this line in inches 	
11)	Flame has 67p. Tyger has 4 TENS and 3 FIVES. How much more does Flame have?	
12)	A watch costs £39. How much change from £50?	
13)	Milly is 7cm shorter than Molly. If Milly is 106cm tall, how tall is Molly?	
14)	The clock shown is 30 minutes slow. What is the correct time?	
15)	Which of these numbers is not a multiple of 3? 18 13 9 12 15	
16)	An apple weighs about 100 grams. Roughly how much do 8 apples weigh?	





MENTAL MATHS SHEET 3:B7 ANSWERS

1)	$100 - 7$	93
2)	Write one thousand three hundred and eight	1308
3)	What is the value of the digit 9 in the number 3291?	90
4)	Double a number is 26. What is the number?	13
5)	What fraction is shaded? 	$\frac{3}{7}$
6)	How many cm in $3 \frac{1}{2}$ metres?	350
7)	$3 \frac{1}{2} + 4 \frac{1}{2}$	8
8)	Double 7 = ___ + 10	4
9)	Add together 1 TWENTY, 3 TENS and 3 FIVES.	65p
10)	Measure this line in cm 	about 7.3cm
11)	Flame has 67p. Tyger has 4 TENS and 3 FIVES. How much more does Flame have?	12p
12)	A watch costs £39. How much change from £50?	£11
13)	Milly is 7cm shorter than Molly. If Milly is 106cm tall, how tall is Molly?	113cm
14)	The clock shown is 30 minutes slow. What is the correct time?	 1:50
15)	Which of these numbers is not a multiple of 3? 18 13 9 12 15	13
16)	An apple weighs about 100 grams. Roughly how much do 8 apples weigh?	800g

