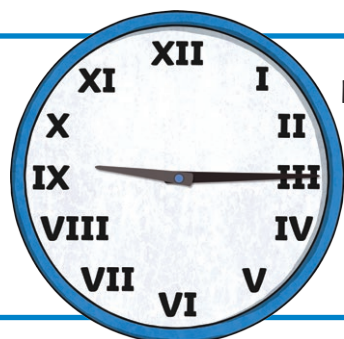


Royal Wedding

Tell the Time: Schedule for the Day

Fill in the missing times for the following time problems to work out how long it might take Prince Harry and Meghan Markle to complete each part of their wedding day.

Harry sets off for St George's Chapel at 11:05 a.m. It takes him 25 minutes to get there. Write the time that Harry will arrive using the 24-hour clock. _____




Meghan starts having her hair styled at:

Write the time shown using the 12-hour clock.

Meghan sets off for St George's Chapel at 11:35 a.m. She arrives 22 minutes later. Write the time that she arrives using the 12-hour clock. _____



The wedding ceremony should begin at midday. It actually begins 17 minutes late. Write the time that the ceremony starts using the 24-hour clock. _____

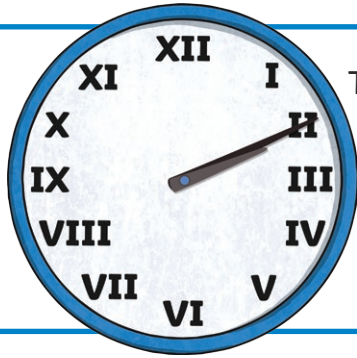


The ceremony lasts for 1 hour and 20 minutes. Write the time that it ends using the 24-hour clock. _____



Royal Wedding

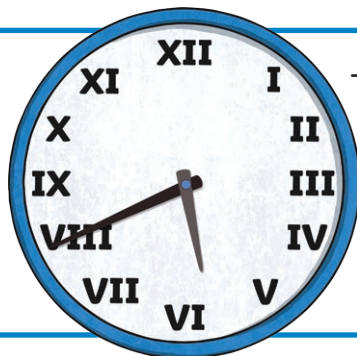

Tell the Time: Schedule for the Day



The happy couple pose for photographs until the time shown here:

Write the time using the 24-hour clock.


At 14:30, Meghan and Harry travel around Windsor to see the public. This takes 45 minutes. Write the time that they complete the journey, using the 12-hour clock. _____



The wedding reception meal begins at 15:45. It ends at this time:

Write the time the meal ended, using the 12-hour clock. _____

The wedding speeches begin at 18:35. What time is this using 12-hour clock? _____

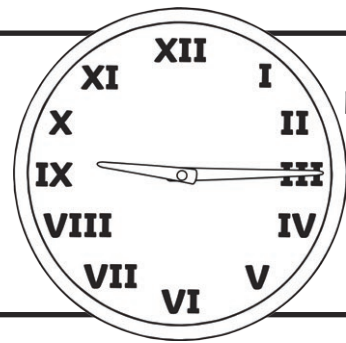


The speeches last for 42 minutes. Write the time that the speeches finish, using the 24-hour clock. _____

Royal Wedding

Tell the Time: Schedule for the Day Answers

Harry sets off for St George's Chapel at 11:05 a.m. It takes him 25 minutes to get there. Write the time that Harry will arrive using the 24-hour clock. **11:30**



Meghan starts having her hair styled at:

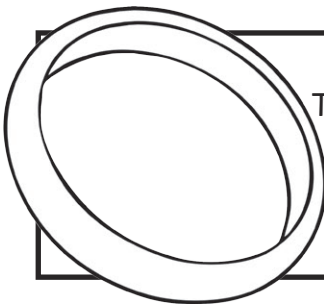
Write the time shown using the 12-hour clock.

9:15 a.m.

Meghan sets off for St George's Chapel at 11:35 a.m. She arrives 22 minutes later. Write the time that she arrives using the 12-hour clock. **11:57 a.m.**



The wedding ceremony should begin at midday. It actually begins 17 minutes late. Write the time that the ceremony starts using the 24-hour clock. **12:17**

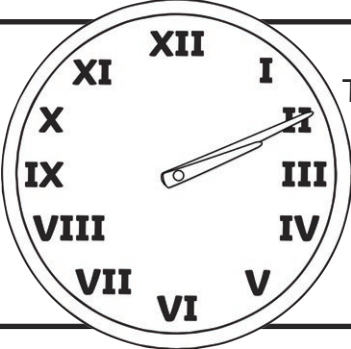


The ceremony lasts for 1 hour and 20 minutes. Write the time that it ends using the 24-hour clock. **13:37**



Royal Wedding

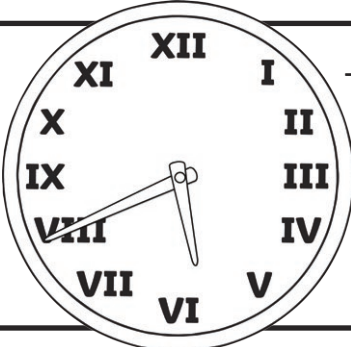
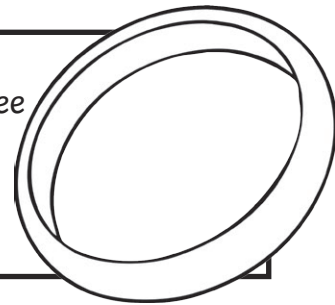
Tell the Time: Schedule for the Day **Answers**



The happy couple pose for photographs until the time shown here:

Write the time using the 24-hour clock.
14:10

At 14:30, Meghan and Harry travel around Windsor to see the public. This takes 45 minutes. Write the time that they complete the journey, using the 12-hour clock. **3:15 p.m.**



The wedding reception meal begins at 15:45. It ends at this time:

Write the time the meal ended, using the 12-hour clock. **5:40 p.m.**

The wedding speeches begin at 18:35. What time is this using 12-hour clock? **6:35 p.m.**



The speeches last for 42 minutes. Write the time that the speeches finish, using the 24-hour clock. **19:17**