


# Bus Timetable Problems

I can interpret and use timetables (ACMMG139).

Use the Twinklville Bus Timetable to answer each question.

Twinklville Bus Timetable										
Major Stops	Twinkl Street	Star Street	Twinkl City	Cloud Court	Twinkl Beach	Sunny Avenue	Cloud Court	Twinkl City	Star Street	Twinkl Street
Stop reference	E	F	A	B	C	D	B	A	F	E
Bus Route	<b>Monday to Friday</b>									
501 (am)	9:10	9:20	9:40	9:55	10:05	10:10	10:25	10:40	11:00	11:10
501 (pm)	12:00	12:10	12:30	12:45	12:55	1:00	1:15	1:30	1:50	2:00
Bus Route	<b>Saturday to Sunday</b>									
501 (am)	8:30	8:40	9:00	9:15	9:25	9:30	9:45	10:00	10:20	10:30
501 (pm)	12:30	12:40	1:00	1:15	1:25	1:30	1:45	2:00	2:20	2:30
Approx Travel Time	10 min.	20 min.	15 min.	10 min.	5 min.	15 min.	15 min.	20 min.	10 min.	



1. Can you catch a bus at 9:10 on Sunday?

2. What times can you catch the bus from Twinkl Beach?

3. How long does it take to travel between Twinkl Beach and Sunny Avenue?

4. What is the earliest time you can catch a bus from Twinkl Street on a Saturday?

5. How many destinations does the bus travel to?

6. If you were hopping on the bus at 1pm on a Tuesday, which stop would you be at?

7. If you were getting off the bus at 12:10 on a Thursday, which stop would you be at?

8. What bus number would you need to catch on a Wednesday morning?

9. What stop reference is 'F'?


10. How many days a week does the bus operate?

# Bus Timetable Problems

I can interpret and use timetables (ACMMG139).

Use the Twinklville Bus Timetable to answer each question.

Twinklville Bus Timetable										
Major Stops	Twinkl Street	Star Street	Twinkl City	Cloud Court	Twinkl Beach	Sunny Avenue	Cloud Court	Twinkl City	Star Street	Twinkl Street
Stop reference	E	F	A	B	C	D	B	A	F	E
Bus Route	<b>Monday to Friday</b>									
501 (am)	9:10	9:20	9:40	9:55	10:05	10:10	10:25	10:40	11:00	11:10
501 (pm)	12:00	12:10	12:30	12:45	12:55	1:00	1:15	1:30	1:50	2:00
Bus Route	<b>Saturday to Sunday</b>									
501 (am)	8:30	8:40	9:00	9:15	9:25	9:30	9:45	10:00	10:20	10:30
501 (pm)	12:30	12:40	1:00	1:15	1:25	1:30	1:45	2:00	2:20	2:30
Approx Travel Time	10 min.	20 min.	15 min.	10 min.	5 min.	15 min.	15 min.	20 min.	10 min.	



1. Can you catch a bus at 1:50pm on a Thursday?

2. What times can you catch the bus from major stop D?

3. How long does it take to travel between Twinkl City and Twinklville Beach?

4. What is the earliest time you can catch a bus from Star Street on a Sunday?

5. How many stops between Twinkl Street and Cloud Court?

6. If you were hopping on the bus at 12:30pm on a Saturday, which stop would you be at?

7. If you were getting off the bus at 1:30pm on a Tuesday, which stop would you be at?

8. What bus number would you need to catch on a Sunday afternoon?

9. How long does it take to travel between stops 'F' and 'A'?


10. If you wanted to get from Twinkl Street to Cloud Court by 10am, what time would you catch the bus?

# Bus Timetable Problems

I can interpret and use timetables (ACMMG139).

Use the Twinklville Bus Timetable to answer each question.

Twinklville Bus Timetable										
Major Stops	Twinkl Street	Star Street	Twinkl City	Cloud Court	Twinkl Beach	Sunny Avenue	Cloud Court	Twinkl City	Star Street	Twinkl Street
Stop reference	E	F	A	B	C	D	B	A	F	E
Bus Route	<b>Monday to Friday</b>									
501 (am)	9:10	9:20	9:40	9:55	10:05	10:10	10:25	10:40	11:00	11:10
501 (pm)	12:00	12:10	12:30	12:45	12:55	1:00	1:15	1:30	1:50	2:00
Bus Route	<b>Saturday to Sunday</b>									
501 (am)	8:30	8:40	9:00	9:15	9:25	9:30	9:45	10:00	10:20	10:30
501 (pm)	12:30	12:40	1:00	1:15	1:25	1:30	1:45	2:00	2:20	2:30
Approx Travel Time	10 min.	20 min.	15 min.	10 min.	5 min.	15 min.	15 min.	20 min.	10 min.	



1. Can you catch a bus at 1:15pm on both a Tuesday & Sunday?

2. What times can you catch the bus from major stop A?

3. How long does it take to travel from Twinkl Street and back again?

4. What is the latest time you can catch a bus from Twinkl City on a Friday?

5. How many stops between Twinklville Beach and Star Street?

6. If you were hopping on the bus at 12:30pm on a Saturday, which stop would you be at?

7. If you got on the bus at Cloud Court at 1:15pm and hopped off 45 minutes later, which stop would you be at?

8. If you arrive at Twinklville Beach at 10:05am and then hop back on the bus to travel home at 12:55pm, how long would you spend at the beach?

9. How long does it take to travel between stops 'D' and 'E'?

10. If a bus trip only takes 15 minutes with no stops in between. What stops could you be travelling between?

# Bus Timetable Problems **Answers**

★	★★	★★★
<ol style="list-style-type: none"> <li>1. <b>No</b></li> <li>2. <b>9:25am, 10:05am, 12:55pm and 1:25pm</b></li> <li>3. <b>5 minutes</b></li> <li>4. <b>8:30am</b></li> <li>5. <b>6</b></li> <li>6. <b>Sunny Avenue</b></li> <li>7. <b>Star Street</b></li> <li>8. <b>501</b></li> <li>9. <b>Star Street</b></li> <li>10. <b>7</b></li> </ol>	<ol style="list-style-type: none"> <li>1. <b>Yes</b></li> <li>2. <b>9:30am, 10:10am, 1:00pm and 1:30pm</b></li> <li>3. <b>25 minutes</b></li> <li>4. <b>8:40am</b></li> <li>5. <b>2 - Star Street and Twinkl City</b></li> <li>6. <b>Twinkl Street</b></li> <li>7. <b>Twinkl City</b></li> <li>8. <b>501</b></li> <li>9. <b>20 minutes</b></li> <li>10. <b>9:10am</b></li> </ol>	<ol style="list-style-type: none"> <li>1. <b>Yes</b></li> <li>2. <b>9:00am, 9:40am, 10:00am, 10:40am, 12:30pm, 1:00pm, 1:30pm and 2:00pm</b></li> <li>3. <b>2 hours</b></li> <li>4. <b>1:30pm</b></li> <li>5. <b>3 - Sunny Avenue, Cloud Court and Twinkl City</b></li> <li>6. <b>Twinkl Street</b></li> <li>7. <b>Twinkl City</b></li> <li>8. <b>2 hours 50 minutes</b></li> <li>9. <b>60 minutes (1 hour)</b></li> <li>10. <b>Twinkl City and Cloud Court, Sunny Avenue and Cloud Court, Cloud Court and Twinkl City</b></li> </ol>