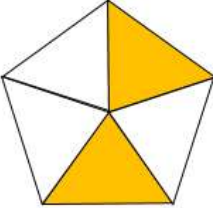



Name

Date



MENTAL MATHS SHEET 3:A5

1)	$17 - 8$	
2)	Halve 18	
3)	What fraction is shaded? 	
4)	3 TENS = ____ FIVES	
5)	What is the name of this shape?  cube cone cylinder sphere pyramid	
6)	How many cm in $\frac{1}{2}$ m?	
7)	$200 + 40 + 9 =$	
8)	What is the next number? 30, 35, 40, 45, 50, ____	
9)	$7 + 7 + 7 + 7 =$ ____ $\times 7$	
10)	What number is 10 less than 54?	
11)	3 TENS + 3 FIVES	
12)	How many sides does an octagon have?	
13)	How many more is 14 than 8?	
14)	I run 2 miles every day for a week. How far have I run?	
15)	1 yard = 3 feet. How many feet in 5 yards?	
16)	Which of these numbers is odd? 260 152 386 351	

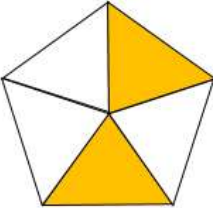



Name

Date



MENTAL MATHS SHEET 3:A5 ANSWERS

1)	$17 - 8$	9
2)	Halve 18	9
3)	What fraction is shaded? 	$\frac{2}{5}$
4)	3 TENS = ____ FIVES	6
5)	What is the name of this shape?  cube cone cylinder sphere pyramid	cylinder
6)	How many cm in $\frac{1}{2}$ m?	50
7)	$200 + 40 + 9 =$	249
8)	What is the next number? 30, 35, 40, 45, 50, ____	55
9)	$7 + 7 + 7 + 7 =$ ____ $\times 7$	4
10)	What number is 10 less than 54?	44
11)	3 TENS + 3 FIVES	45p
12)	How many sides does an octagon have?	8
13)	How many more is 14 than 8?	6
14)	I run 2 miles every day for a week. How far have I run?	14 miles
15)	1 yard = 3 feet. How many feet in 5 yards?	15
16)	Which of these numbers is odd? 260 152 386 351	351



Free Math Sheets, Math Games and Math Help

MATH-SALAMANDERS.COM