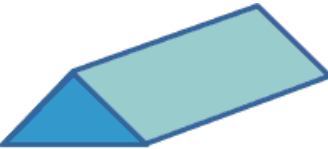
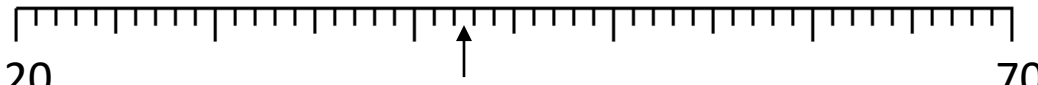


Name

Date



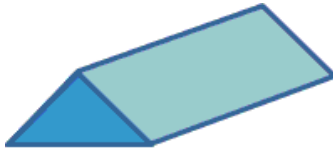
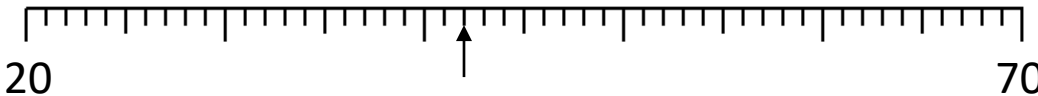
# MENTAL MATHS SHEET 3:B9

1)	$4 + 500 + 20$	
2)	$\underline{\quad} - 5 = 11$	
3)	$12 \div 2$	
4)	$3 \times 6$	
5)	How many vertices? 	
6)	What is the missing number? $34 \quad \underline{\quad} \quad 26 \quad 22 \quad 18 \quad 14$	
7)	$124 + 30$	
8)	 Which number is the arrow pointing at?	
9)	$754 - 300$	
10)	The time is 1:20pm. What was the time 3 hours ago?	
11)	Double 36	
12)	I have two £2 coins and three 50p coins. How much more do I need to make £5?	£
13)	In a long jump, Captain jumps 195cm and Tyger jumps 2m 10cm. How much further did Tyger jump?	
14)	Raffle tickets cost 20p. Sally spends £1.20 on tickets. How many did she buy?	
15)	The temperature is $4^{\circ}\text{C}$ . It falls by $7^{\circ}\text{C}$ overnight. What is the temperature now?	
16)	A pot plant costs £6. How much would 4 plants cost?	





# MENTAL MATHS SHEET 3:B9 ANSWERS

1)	$4 + 500 + 20$	<b>524</b>
2)	$\underline{\quad} - 5 = 11$	<b>16</b>
3)	$12 \div 2$	<b>6</b>
4)	$3 \times 6$	<b>18</b>
5)	How many vertices? 	<b>6</b>
6)	What is the missing number? $34 \quad \underline{\quad} \quad 26 \quad 22 \quad 18 \quad 14$	<b>30</b>
7)	$124 + 30$	<b>154</b>
8)	 Which number is the arrow pointing at?	<b>42</b>
9)	$754 - 300$	<b>454</b>
10)	The time is 1:20pm. What was the time 3 hours ago?	<b>10:20am</b>
11)	Double 36	<b>72</b>
12)	I have two £2 coins and three 50p coins. How much more do I need to make £5?	<b>£1.50</b>
13)	In a long jump, Captain jumps 195cm and Tyger jumps 2m 10cm. How much further did Tyger jump?	<b>15cm</b>
14)	Raffle tickets cost 20p. Sally spends £1.20 on tickets. How many did she buy?	<b>6</b>
15)	The temperature is $4^{\circ}\text{C}$ . It falls by $7^{\circ}\text{C}$ overnight. What is the temperature now?	<b><math>-3^{\circ}\text{C}</math></b>
16)	A pot plant costs £6. How much would 4 plants cost?	<b>£24</b>

